

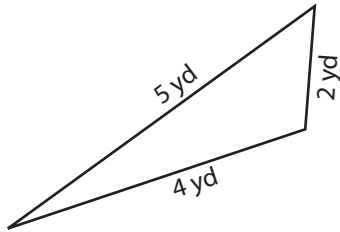
Name : \_\_\_\_\_

# Identifying Triangles

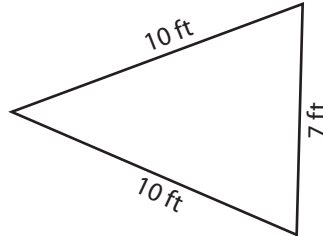
Sides - Numerals: S2

Identify each triangle based on sides. (Equilateral, Isosceles or Scalene)

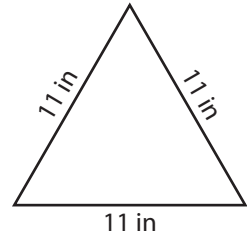
1)



2)

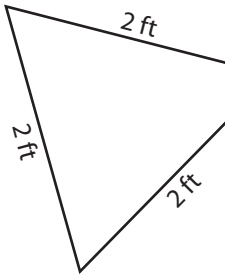


3)



Scalene triangle

4)



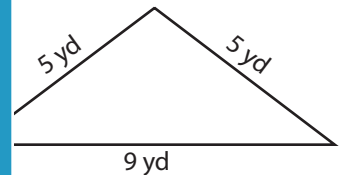
# PREVIEW

Gain complete access to the largest collection of worksheets in all subjects!

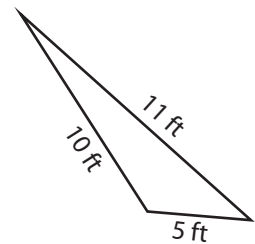
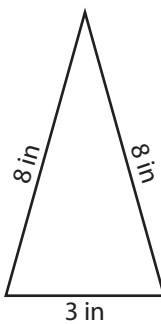
Members, please log in to download this worksheet.

Not a member? Please sign up to gain complete access.

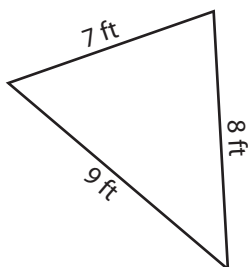
[www.mathworksheets4kids.com](http://www.mathworksheets4kids.com)



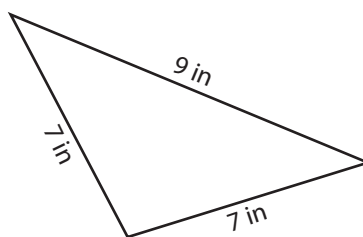
7)



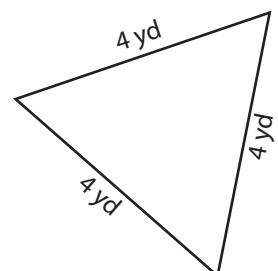
10)



11)



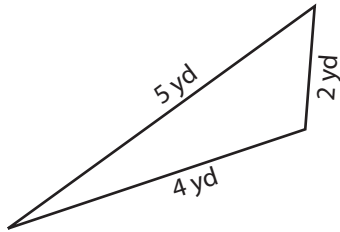
12)



# Identifying Triangles

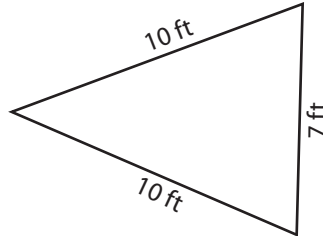
Identify each triangle based on sides. (Equilateral, Isosceles or Scalene)

1)



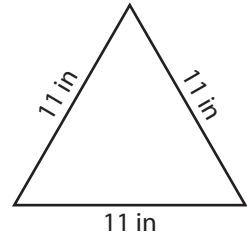
**Scalene triangle**

2)



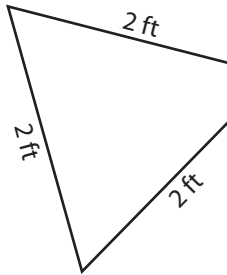
**Isosceles triangle**

3)

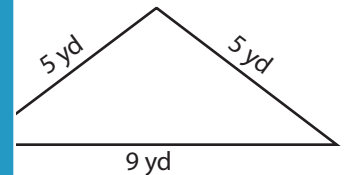


**Equilateral triangle**

4)

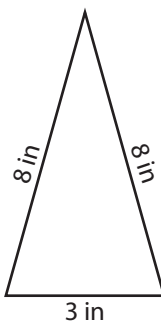


**Equilateral triangle**

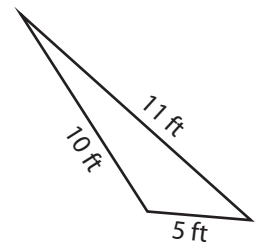


**Isosceles triangle**

7)

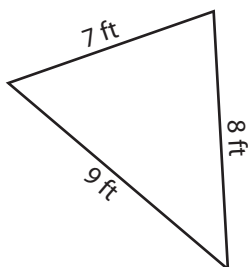


**Isosceles triangle**



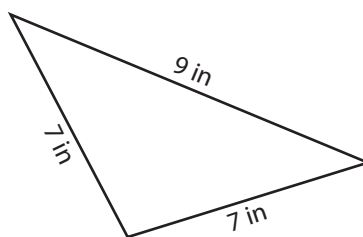
**Scalene triangle**

10)



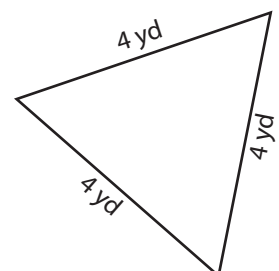
**Scalene triangle**

11)



**Isosceles triangle**

12)



**Equilateral triangle**

**PREVIEW**

Gain complete access to the largest collection of worksheets in all subjects!

Members, please log in to download this worksheet.

Not a member? Please sign up to gain complete access.

[www.mathworksheets4kids.com](http://www.mathworksheets4kids.com)