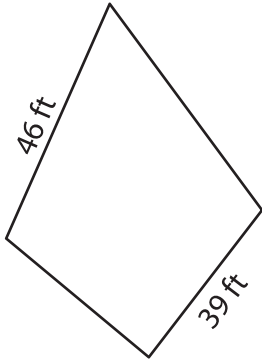


Name : \_\_\_\_\_

# Perimeter of a Kite

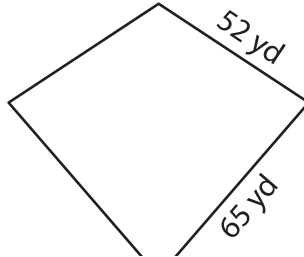
Find the perimeter of each kite.

1)



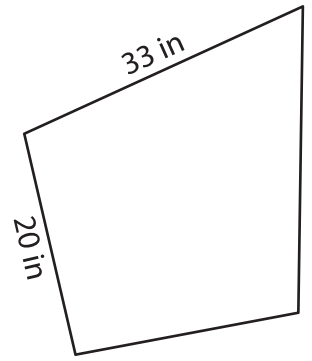
Perimeter = \_\_\_\_\_

2)

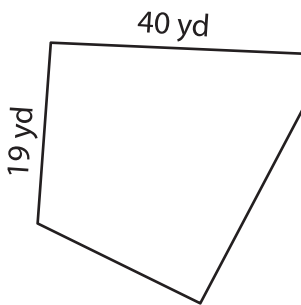


Perimeter = \_\_\_\_\_

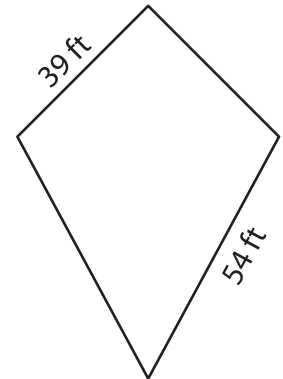
3)



4)



Perimeter = \_\_\_\_\_



Perimeter = \_\_\_\_\_

7) What is the perimeter of

[www.mathworksheets4kids.com](http://www.mathworksheets4kids.com)

2 feet?

\_\_\_\_\_

8) If the non-congruent sides of a kite measure 51 yards and 29 yards, find the perimeter of the kite.

\_\_\_\_\_

**PREVIEW**

Gain complete access to the largest collection of worksheets in all subjects!

Members, please log in to download this worksheet.

Not a member? Please sign up to gain complete access.

[www.mathworksheets4kids.com](http://www.mathworksheets4kids.com)