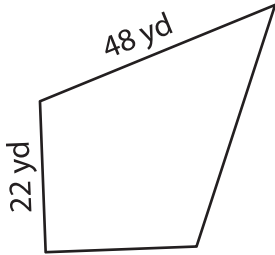


Name : \_\_\_\_\_

# Perimeter of a Kite

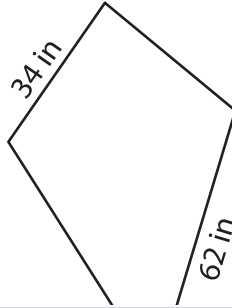
Find the perimeter of each kite.

1)

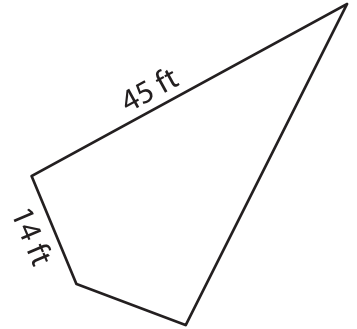


Perimeter = \_\_\_\_\_

2)

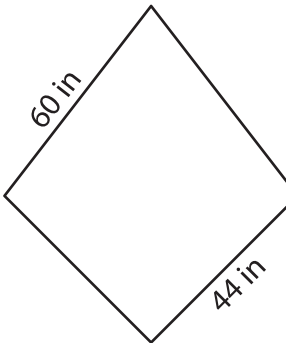


3)



Perimeter = \_\_\_\_\_

4)



Perimeter = \_\_\_\_\_

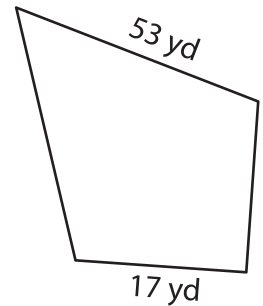
**PREVIEW**

Gain complete access to the largest collection of worksheets in all subjects!

Members, please log in to download this worksheet.

Not a member? Please sign up to gain complete access.

[www.mathworksheets4kids.com](http://www.mathworksheets4kids.com)



Perimeter = \_\_\_\_\_

7) One of the sides of a kite is 30 inches, and the other is 45 inches. Determine its perimeter.

8) One of the sides of a kite is 30 inches, and the other is 45 inches. Determine its perimeter.

\_\_\_\_\_

8) If the lengths of the sides of a kite are 23 feet and 16 feet, what is its perimeter?

\_\_\_\_\_