

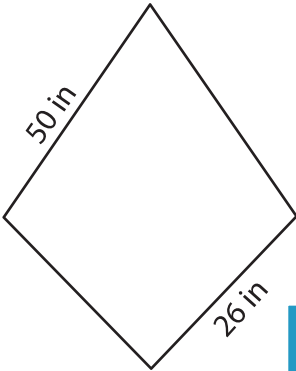
Name : \_\_\_\_\_

L2S3

## Perimeter of a Kite

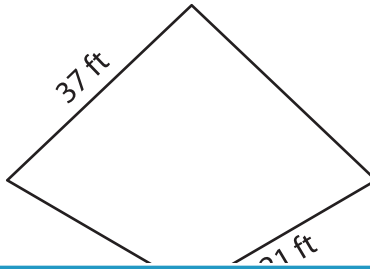
Find the perimeter of each kite.

1)

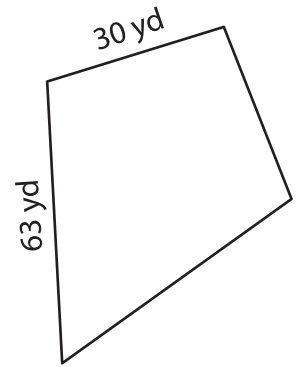


Perimeter = \_\_\_\_\_

2)

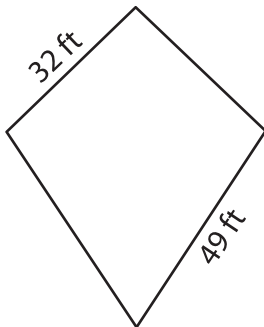


3)



Perimeter = \_\_\_\_\_

4)



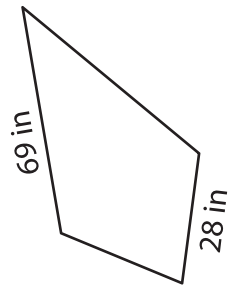
Perimeter = \_\_\_\_\_

**PREVIEW**  
Gain complete access to the largest collection of worksheets in all subjects!

Members, please log in to download this worksheet.

Not a member? Please sign up to gain complete access.

[www.mathworksheets4kids.com](http://www.mathworksheets4kids.com)



Perimeter = \_\_\_\_\_

7) Find the perimeter of the

yards.

\_\_\_\_\_

8) The side lengths of a kite are 35 inches and 51 inches. Determine the perimeter of the kite.

\_\_\_\_\_