

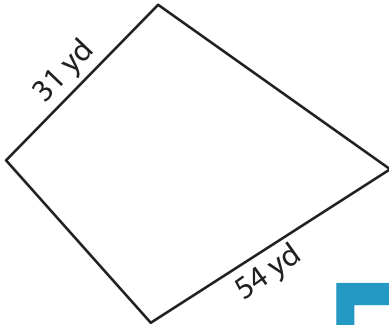
Name : _____

L2S5

Perimeter of a Kite

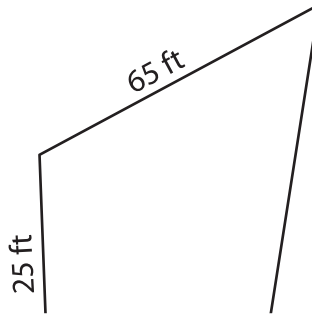
Find the perimeter of each kite.

1)

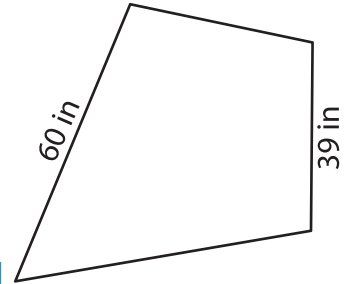


Perimeter = _____

2)

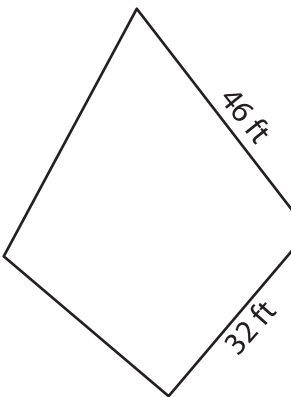


3)

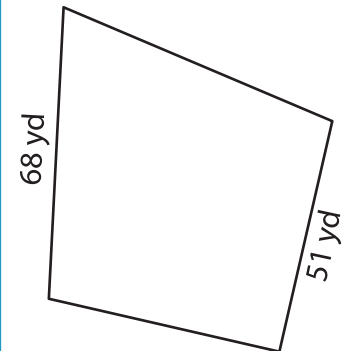


Perimeter = _____

4)



Perimeter = _____



Perimeter = _____

7) What is the perimeter of

8) One of the sides of a kite measures 43 inches. If the other side of the kite measures 12 inches, determine its perimeter.

PREVIEW

Gain complete access to the largest collection of worksheets in all subjects!

Members, please log in to download this worksheet.

Not a member? Please sign up to gain complete access.

www.mathworksheets4kids.com