

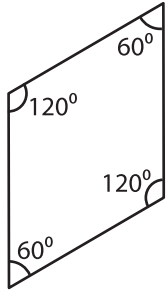
Name : _____

Parallelogram

Sheet 1

A) State whether each quadrilateral is a parallelogram.

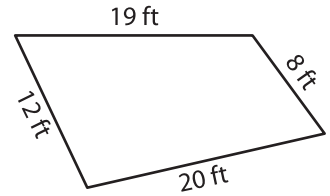
1)



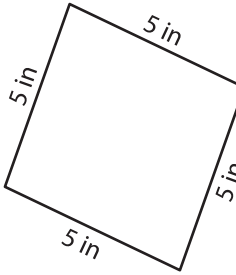
2)



3)



4)



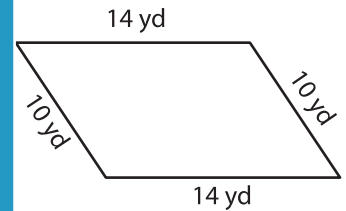
PREVIEW

Gain complete access to the largest collection of worksheets in all subjects!

Members, please log in to download this worksheet.

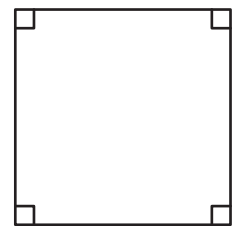
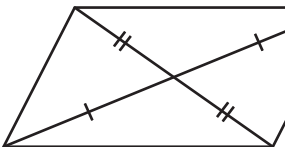
Not a member? Please sign up to gain complete access.

www.mathworksheets4kids.com



B) State whether each

7)



10) EFGH is a quadrilateral. The diagonals \overline{EG} and \overline{FH} bisect each other. State whether EFGH is a parallelogram.