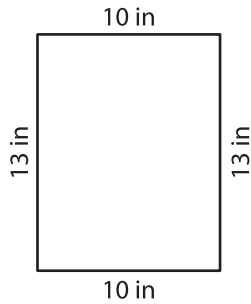


Name : _____

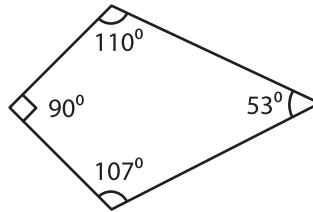
Parallelogram

A) State whether each quadrilateral is a parallelogram.

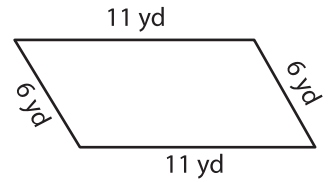
1)



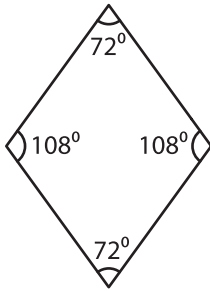
2)



3)



4)



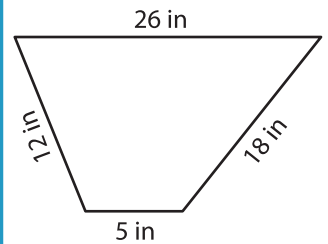
PREVIEW

Gain complete access to the largest collection of worksheets in all subjects!

Members, please log in to download this worksheet.

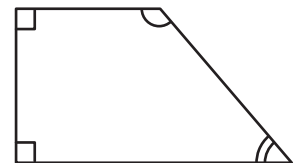
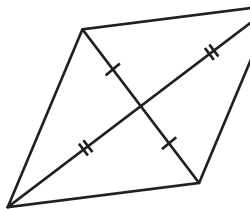
Not a member? Please sign up to gain complete access.

www.mathworksheets4kids.com



B) State whether each

7)



10) PQRS is a quadrilateral. If $m\angle P = 99^\circ$, $m\angle Q = 90^\circ$, $m\angle R = 100^\circ$ and $m\angle S = 61^\circ$, write whether PQRS is a parallelogram.