

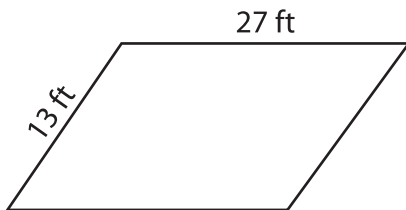
Name : _____

L2S1

Perimeter of a Parallelogram

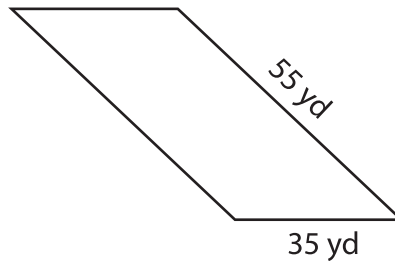
Find the perimeter of each parallelogram.

1)

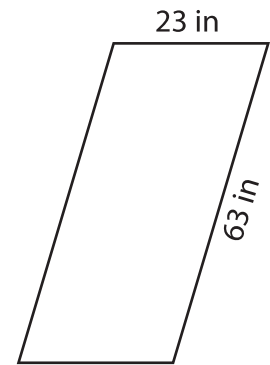


Perimeter = _____

2)

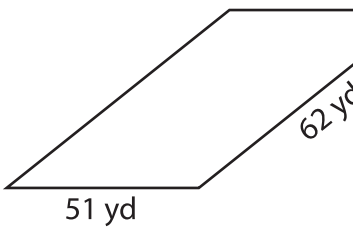


3)




Perimeter = _____

4)



Perimeter = _____



Perimeter = _____

7) The lengths of the adjacent sides of a parallelogram are 15 cm and 20 cm.

What is the perimeter of the parallelogram?

8) Find the perimeter of the parallelogram, if its adjacent sides measure 89 yards and 54 yards.

PREVIEW

Gain complete access to the largest collection of worksheets in all subjects!

Members, please log in to download this worksheet.

Not a member? Please sign up to gain complete access.

www.mathworksheets4kids.com