

Name : \_\_\_\_\_

L2S3

## Perimeter of a Parallelogram

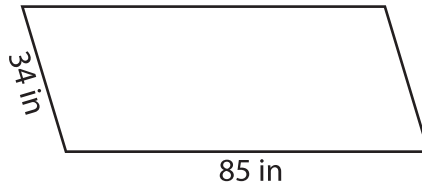
Find the perimeter of each parallelogram.

1)

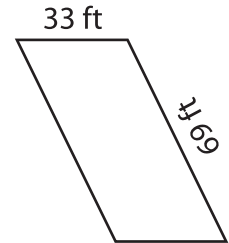


Perimeter = \_\_\_\_\_

2)

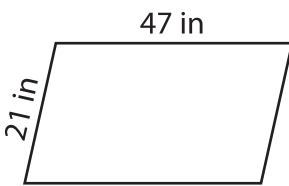


3)



Perimeter = \_\_\_\_\_

4)



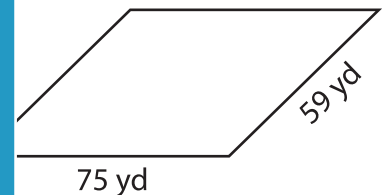
Perimeter = \_\_\_\_\_

**PREVIEW**  
Gain complete access to the largest collection of worksheets in all subjects!

Members, please log in to download this worksheet.

Not a member? Please sign up to gain complete access.

[www.mathworksheets4kids.com](http://www.mathworksheets4kids.com)



Perimeter = \_\_\_\_\_

7) The adjacent sides of a parallelogram are 27 inches and 66 inches. Find the perimeter of the parallelogram.

Find the perimeter of the parallelogram.

8) What is the perimeter of the parallelogram whose adjacent sides measure 27 inches and 66 inches?