

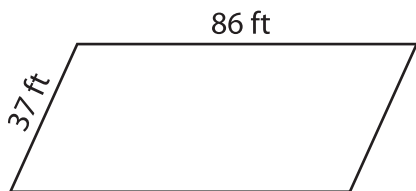
Name : _____

L2S4

Perimeter of a Parallelogram

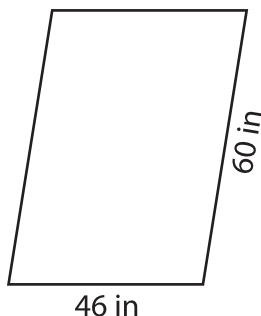
Find the perimeter of each parallelogram.

1)

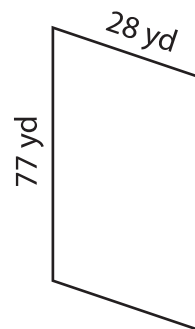


Perimeter = _____

2)

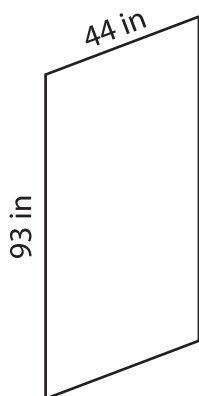


3)



Perimeter = _____

4)



Perimeter = _____

PREVIEW

Gain complete access to the largest collection of worksheets in all subjects!

Members, please log in to download this worksheet.

Not a member? Please sign up to gain complete access.

www.mathworksheets4kids.com

7) If the lengths of the adjacent sides are 120 ft and 80 ft, find the perimeter of the parallelogram.

8) Determine the perimeter of the parallelogram whose adjacent sides measure 31 feet and 58 feet.
