

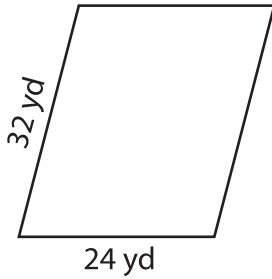
Name : _____

L2S5

Perimeter of a Parallelogram

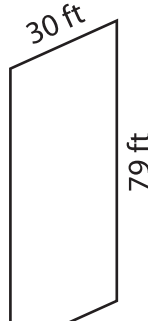
Find the perimeter of each parallelogram.

1)



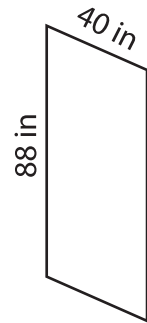
Perimeter = _____

2)

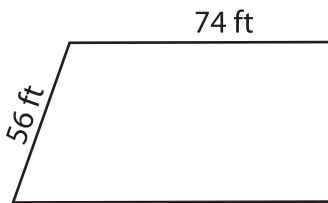


Perimeter = _____

3)



4)



Perimeter = _____

PREVIEW
Gain complete access to the largest collection of worksheets in all subjects!

Members, please log in to download this worksheet.

Not a member? Please sign up to gain complete access.

www.mathworksheets4kids.com



Perimeter = _____

7) Determine the perimeter

8 feet and 97 feet.

8) If the lengths of the adjacent sides of a parallelogram are 81 inches and 43 inches, what is the perimeter of the parallelogram?