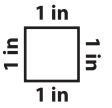

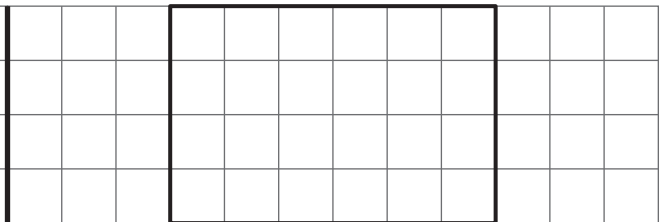


Comparing Perimeter



Find the perimeter of the shapes in each grid. Fill in the box with appropriate symbol $<$, $>$ or $=$ in each problem.


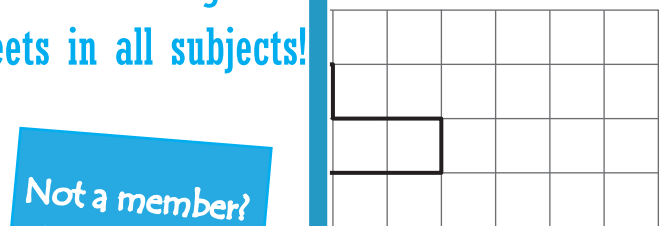
1)  

Perimeter of shape 1 = Perimeter of shape 2 =



Perimeter of shape 1 Perimeter of shape 2

2)  

Perimeter of shape 1 = Perimeter of shape 2 =

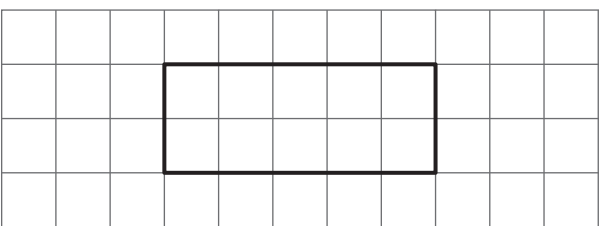

3)  

Perimeter of shape 1 = Perimeter of shape 2 =

4)  

Perimeter of shape 1 = Perimeter of shape 2 =

Perimeter of shape 1 Perimeter of shape 2

5)  

Perimeter of shape 1 = Perimeter of shape 2 =

Perimeter of shape 1 Perimeter of shape 2

PREVIEW

Gain complete access to the largest collection of worksheets in all subjects!

Members, please log in to download this worksheet.

Not a member? Please sign up to gain complete access.

www.mathworksheets4kids.com