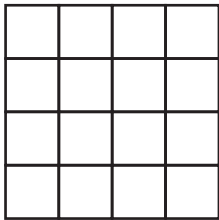
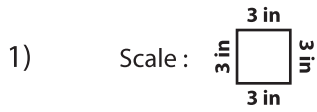
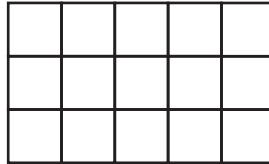


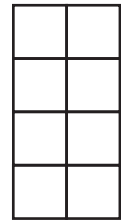
Find the perimeter of each shape.



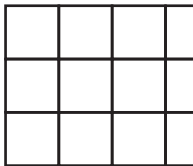
Perimeter = _____



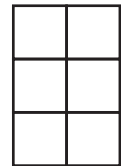
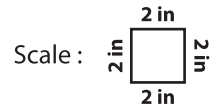
Perimeter = _____



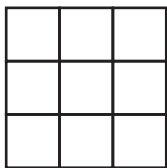
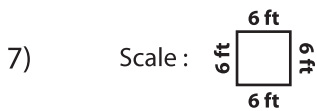
Perimeter = _____



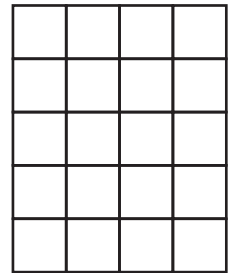
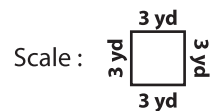
Perimeter = _____



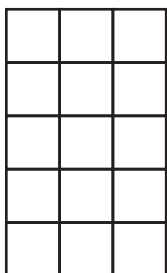
Perimeter = _____



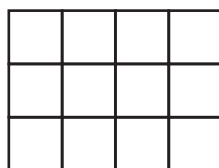
Perimeter = _____




Perimeter = _____



Perimeter = _____



Perimeter = _____



Perimeter = _____

PREVIEW

Gain complete access to the largest collection of worksheets in all subjects!

Members, please log in to download this worksheet.

Not a member? Please sign up to gain complete access.

www.mathworksheets4kids.com