

Name : _____

Perimeter of a Polygon

A) Find the perimeter of each regular polygon.

1) Side length = 12 in, Number of sides = 7

Perimeter = _____

2) Side length = 39 ft, Number of sides = 4

Perimeter = _____

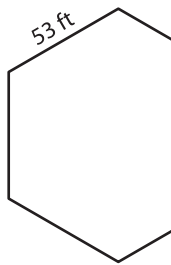
3) Side length = 23 ft, Number of sides = 3

Perimeter = _____

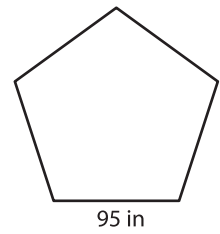
4) Side length = 42 yd, Number of sides = 8

Perimeter = _____

5)



Perimeter = _____



Perimeter = _____

PREVIEW

Gain complete access to the largest collection of worksheets in all subjects!

Members, please log in to download this worksheet.

Not a member? Please sign up to gain complete access.

www.mathworksheets4kids.com

B) Find the perimeter

8) 14 ft, 45 ft, 28 ft, 1

Perimeter = _____

e lengths.

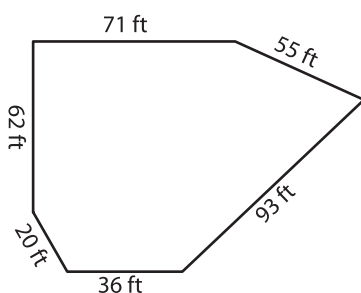
, 65 yd, 38 yd, 26 yd, 34 yd

10) 37 in, 59 in, 24 in,

Perimeter = _____

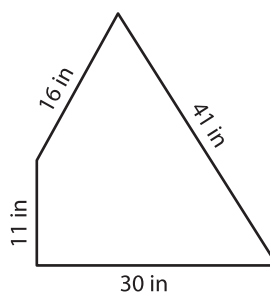
18 in

12)



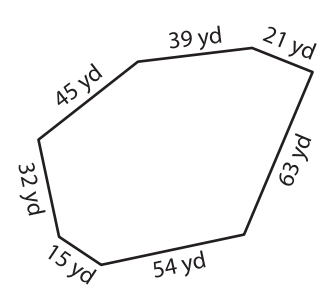
Perimeter = _____

13)



Perimeter = _____

14)



Perimeter = _____