

Name : \_\_\_\_\_

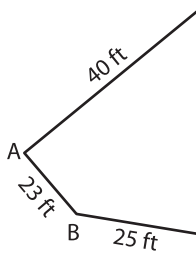
## Perimeter of a Polygon

A) Find the side length of each regular polygon.

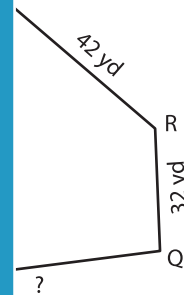
S.No	Perimeter	Number of sides	Side length
1.	228 in	6	
2.	186 ft	3	
3.	360 yd	8	
4.	119 ft	7	

B) Find the side length

5)

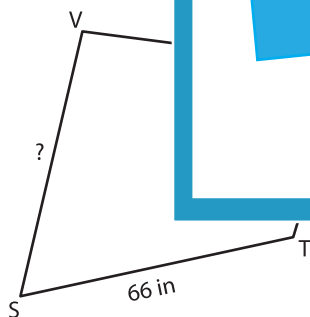


Perimeter = 175

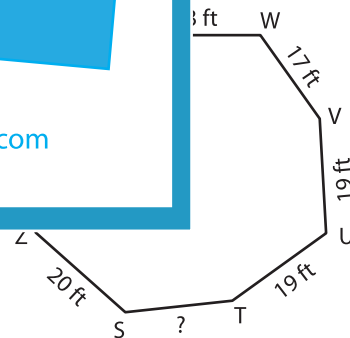


; PQ = \_\_\_\_\_

7)



Perimeter = 259 in ; SV = \_\_\_\_\_



Perimeter = 156 ft ; ST = \_\_\_\_\_

9) A triangle has a perimeter of 206 inches. If the two sides of the triangle measure 59 inches and 94 inches, determine the length of other side.

\_\_\_\_\_

# PREVIEW

Gain complete access to the largest collection of worksheets in all subjects!

Members, please log in to download this worksheet.

Not a member? Please sign up to gain complete access.

www.mathworksheets4kids.com