

Name : _____

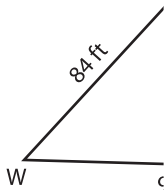
Perimeter of a Polygon

A) Find the side length of each regular polygon.

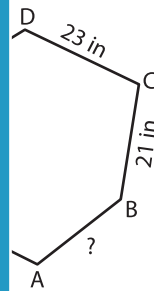
S.No	Perimeter	Number of sides	Side length
1.	185 yd	5	
2.	264 in	8	
3.	348 ft	4	
4.	287 yd	7	

B) Find the side length of the polygon.

5)

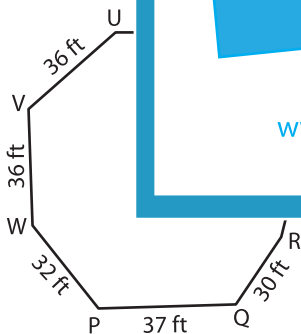


Perimeter = 301

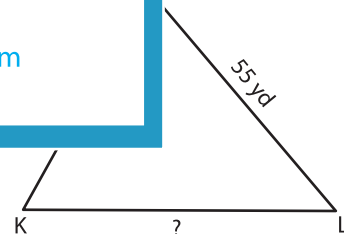


; AB = _____

7)



Perimeter = 272 ft ; ST = _____



Perimeter = 162 yd ; KL = _____

9) Find the side length of the square whose perimeter is 156 inches.

PREVIEW

Gain complete access to the largest collection of worksheets in all subjects!

Members, please log in to download this worksheet.

Not a member? Please sign up to gain complete access.

www.mathworksheets4kids.com