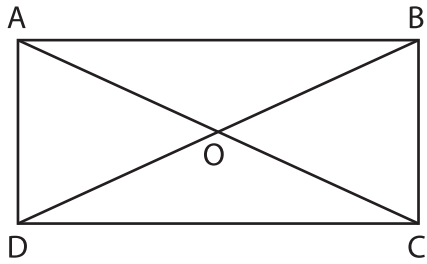


Name : _____

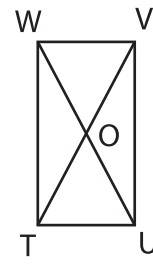
Diagonals of a Rectangle

1)



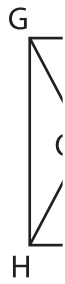
AC = 56 ft. Find AO.

2)

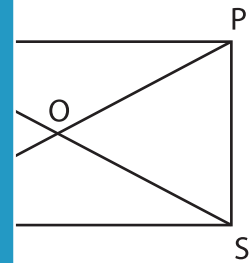


TV = 8.2 in. Find OU.

3)

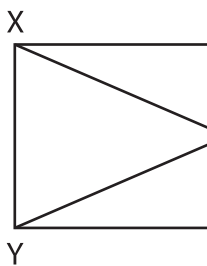


OE = 9 yd. Find

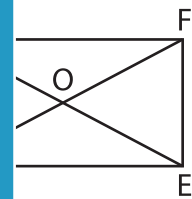


7 ft. Find QS.

5)



YO = 30 in. Find



d. Find FO.

PREVIEW

Gain complete access to the largest collection of worksheets in all subjects!

Members, please log in to download this worksheet.

Not a member? Please sign up to gain complete access.

www.mathworksheets4kids.com

7) KLMN is a rectangle. Determine LN, if \overline{KM} measures 22 inches.

