


Name : \_\_\_\_\_

# Diagonals of a Rectangle

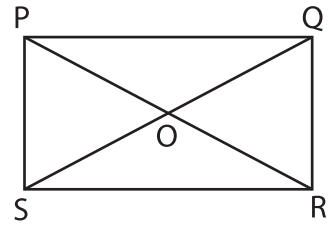
1)



CE = 47.1 in. Find DF.

\_\_\_\_\_

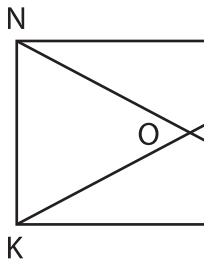
2)



PO = 6.5 yd. Find OR.

\_\_\_\_\_

3)



ON = 16 ft. Find

\_\_\_\_\_



in. Find YO.

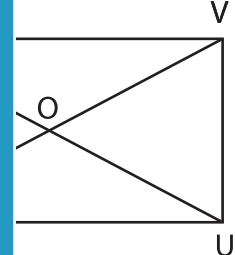
\_\_\_\_\_

5)



BD = 9 yd. Find

\_\_\_\_\_



ft. Find XV.

\_\_\_\_\_

**PREVIEW**

Gain complete access to the largest collection of worksheets in all subjects!

Members, please log in to download this worksheet.

Not a member? Please sign up to gain complete access.

[www.mathworksheets4kids.com](http://www.mathworksheets4kids.com)

7) TUVW is a rectangle. Find UW, if  $\overline{OT}$  measures 37.9 yards.

\_\_\_\_\_

