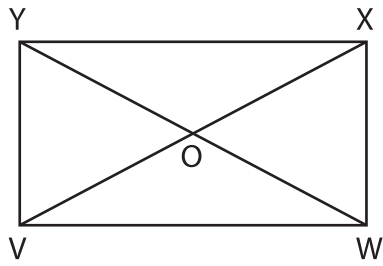


Name : _____

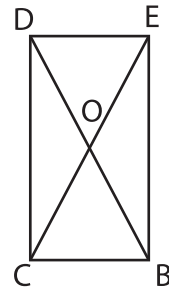
Diagonals of a Rectangle

1)



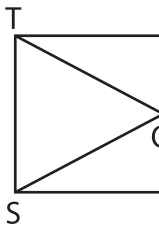
$WO = 10$ yd. Find OY .

2)



$OC = 33$ ft. Find OD .

3)



$QS = 15.5$ in.

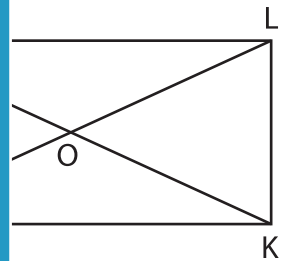
PREVIEW

Gain complete access to the largest collection of worksheets in all subjects!

Members, please log in to download this worksheet.

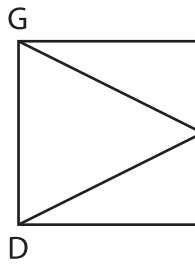
Not a member? Please sign up to gain complete access.

www.mathworksheets4kids.com



yd. Find LO .

5)



$EG = 37.6$ ft.



h. Find VT .

7) ABCD is a rectangle. If \overline{AC} measures 82 feet, determine OD .

