


Name : \_\_\_\_\_

## Perimeter of a Rectangle

T153

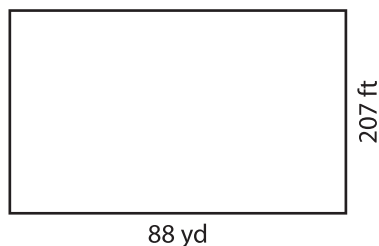
Find the perimeter of each rectangle.

1)



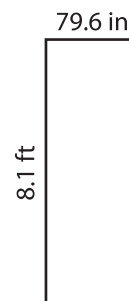
Perimeter = \_\_\_\_\_

2)

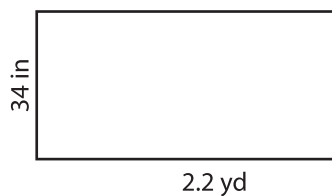


Perimeter = \_\_\_\_\_ in

3)



4)



Perimeter = \_\_\_\_\_

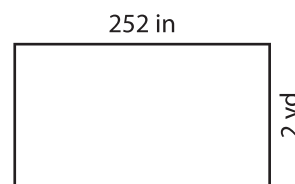
**PREVIEW**

Gain complete access to the largest collection of worksheets in all subjects!

Members, please log in to download this worksheet.

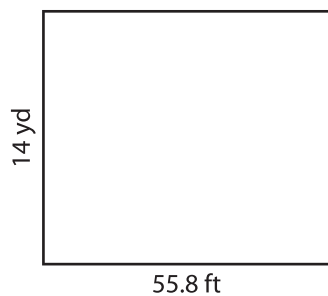
Not a member? Please sign up to gain complete access.

[www.mathworksheets4kids.com](http://www.mathworksheets4kids.com)



Perimeter = \_\_\_\_\_ yd

7)



Perimeter = \_\_\_\_\_ ft



Perimeter = \_\_\_\_\_ in



Perimeter = \_\_\_\_\_ yd