

Name : \_\_\_\_\_

T154

## Perimeter of a Rectangle

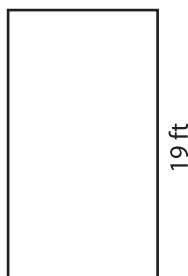
Find the perimeter of each rectangle.

1)




Perimeter = \_\_\_\_\_

2)




Perimeter = \_\_\_\_\_ in

3)



4)



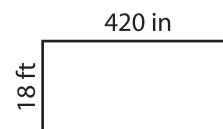
Perimeter = \_\_\_\_\_

**PREVIEW**  
Gain complete access to the largest collection of worksheets in all subjects!

Members, please log in to download this worksheet.

Not a member? Please sign up to gain complete access.

[www.mathworksheets4kids.com](http://www.mathworksheets4kids.com)




Perimeter = \_\_\_\_\_ ft

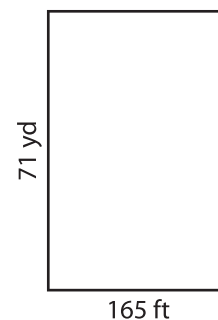
7)



Perimeter = \_\_\_\_\_ in



Perimeter = \_\_\_\_\_ yd



Perimeter = \_\_\_\_\_ yd