

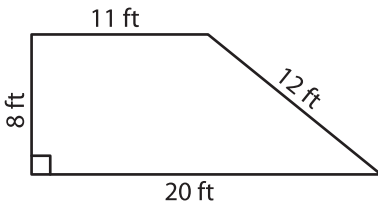
Name : _____

Rhombus

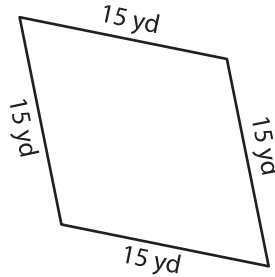
Sheet 2

A) State whether each quadrilateral is a rhombus.

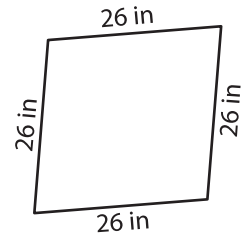
1)



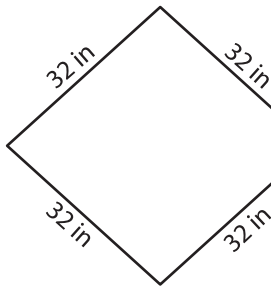
2)



3)



4)



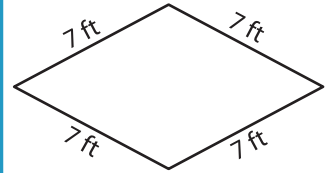
PREVIEW

Gain complete access to the largest collection of worksheets in all subjects!

Members, please log in to download this worksheet.

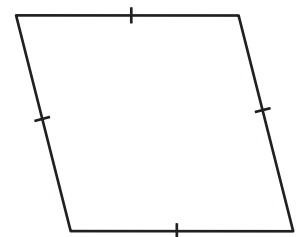
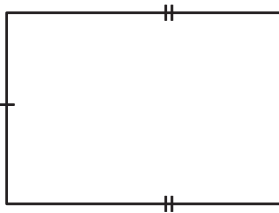
Not a member? Please sign up to gain complete access.

www.mathworksheets4kids.com

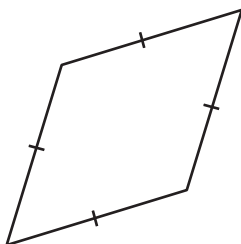


B) State whether each

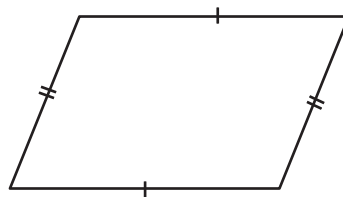
7)



10)



11)



12)

