

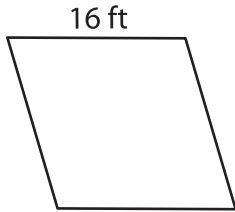
Name : _____

Perimeter of a Rhombus

L2S1

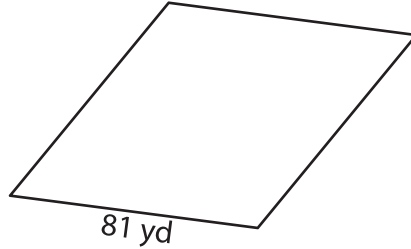
Find the perimeter of each rhombus.

1)



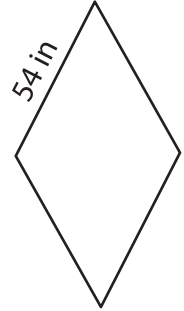
Perimeter = _____

2)

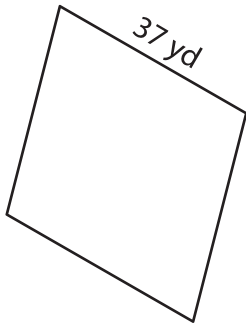


Perimeter = _____

3)



4)



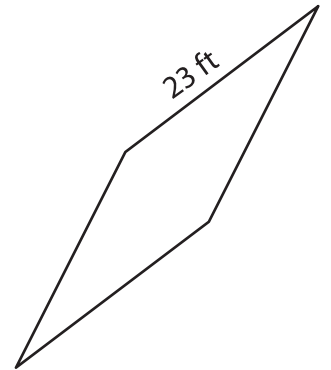
Perimeter = _____

PREVIEW
Gain complete access to the largest
collection of worksheets in all subjects!

Members, please
log in to
download this
worksheet.

Not a member?
Please sign up to
gain complete
access.

www.mathworksheets4kids.com



Perimeter = _____

7) What is the perimeter of

8) Determine the perimeter of the rhombus, if its side length is 43 yards.
