

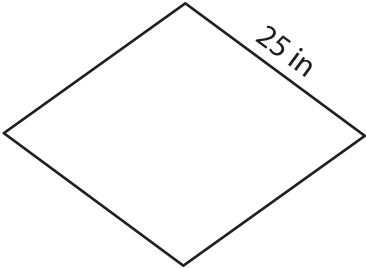
Name : _____

Perimeter of a Rhombus

L2S2

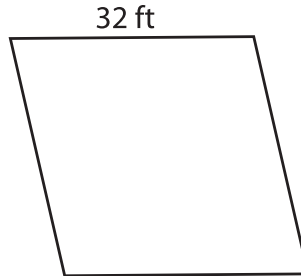
Find the perimeter of each rhombus.

1)



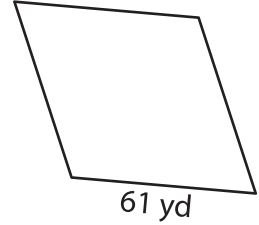
Perimeter = _____

2)



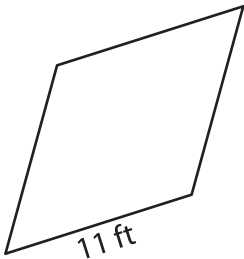
Perimeter = _____

3)



Perimeter = _____

4)



Perimeter = _____

73 in

Perimeter = _____

7) If the length of the side of

of the rhombus.

8) The side of a rhombus measures 87 feet. Calculate the perimeter of the rhombus.

PREVIEW

Gain complete access to the largest collection of worksheets in all subjects!

Members, please log in to download this worksheet.

Not a member? Please sign up to gain complete access.

www.mathworksheets4kids.com