

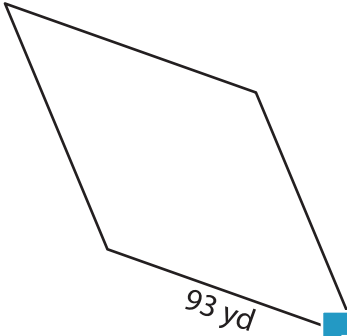
Name : \_\_\_\_\_

## Perimeter of a Rhombus

L2S3

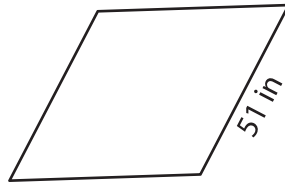
Find the perimeter of each rhombus.

1)

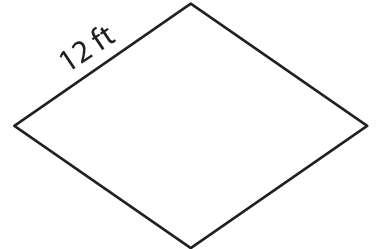


Perimeter = \_\_\_\_\_

2)

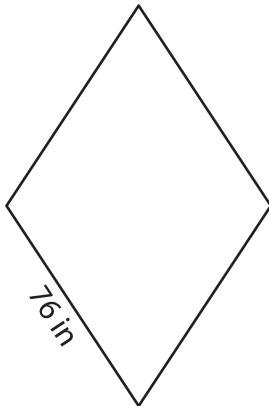


3)



Perimeter = \_\_\_\_\_

4)



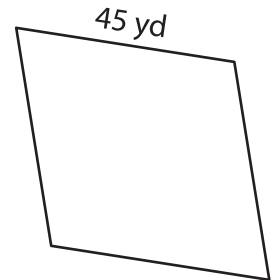
Perimeter = \_\_\_\_\_

**PREVIEW**  
Gain complete access to the largest  
collection of worksheets in all subjects!

Members, please  
log in to  
download this  
worksheet.

Not a member?  
Please sign up to  
gain complete  
access.

[www.mathworksheets4kids.com](http://www.mathworksheets4kids.com)



Perimeter = \_\_\_\_\_

7) Find the perimeter of the

\_\_\_\_\_

8) The side of a rhombus measures 68 yards. What is the perimeter of the rhombus?

\_\_\_\_\_