

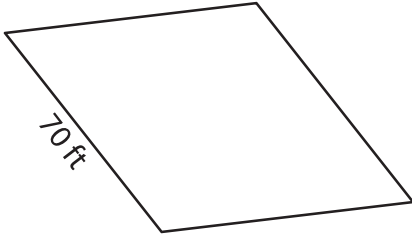
Name : \_\_\_\_\_

## Perimeter of a Rhombus

L2S4

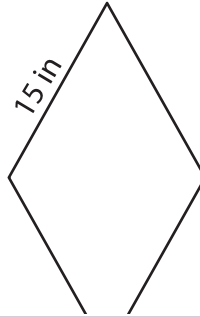
Find the perimeter of each rhombus.

1)

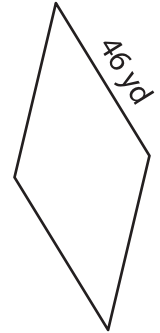


Perimeter = \_\_\_\_\_

2)

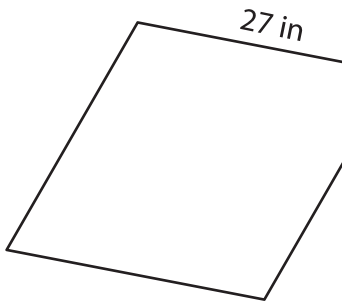


3)



Perimeter = \_\_\_\_\_

4)



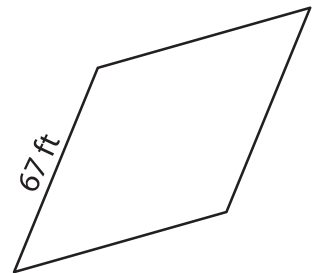
Perimeter = \_\_\_\_\_

**PREVIEW**  
Gain complete access to the largest collection of worksheets in all subjects!

Members, please log in to download this worksheet.

Not a member? Please sign up to gain complete access.

[www.mathworksheets4kids.com](http://www.mathworksheets4kids.com)



Perimeter = \_\_\_\_\_

7) Determine the perimeter

\_\_\_\_\_

8) The length of the side of a rhombus is 36 feet. Find its perimeter.

\_\_\_\_\_