

Name : \_\_\_\_\_


T1L2S1

## Area of a Square

Find the area of each square.

1)


72 ft



Area =

2)


15 in




Area =

3)

17 in



4)



Area =

**PREVIEW**  
Gain complete access to the largest collection of worksheets in all subjects!

Members, please log in to download this worksheet.

Not a member? Please sign up to gain complete access.

[www.mathworksheets4kids.com](http://www.mathworksheets4kids.com)

32 yd

Area =


7)

30 yd




Area =

11 yd



Area =

63 ft



Area =