


Name : \_\_\_\_\_

T1L2S2

## Area of a Square

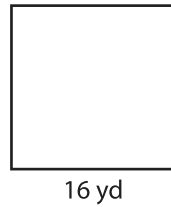
Find the area of each square.

1)




Area =

2)



16 yd


3)



21 ft

Area =

4)



23 yd


Area =

**PREVIEW**  
Gain complete access to the largest collection of worksheets in all subjects!

Members, please log in to download this worksheet.

Not a member? Please sign up to gain complete access.

[www.mathworksheets4kids.com](http://www.mathworksheets4kids.com)



50 in

Area =

7)




13 ft

Area =



Area =



25 yd

Area =