

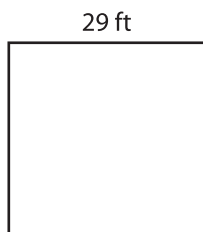
Name : \_\_\_\_\_

T1L2S5

## Area of a Square


Find the area of each square.

1)



Area =

2)



3)



Area =

4)



Area =

Gain complete access to the largest collection of worksheets in all subjects!

Members, please log in to download this worksheet.


Not a member? Please sign up to gain complete access.

[www.mathworksheets4kids.com](http://www.mathworksheets4kids.com)


42 ft

Area =

7)



Area =



Area =



Area =