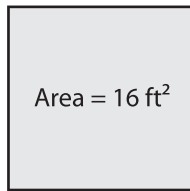


Name : _____

Area of a Square

Example :



$$\text{Area} = \text{Side} \times \text{Side}$$

$$16 \text{ ft}^2 = \text{Side}^2$$

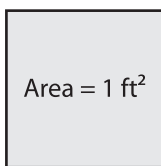
$$\sqrt{16} = \text{Side}$$

$$\text{Side} = \mathbf{4 \text{ ft}}$$

Ans = 4 ft

Find the side length of each square.

1)

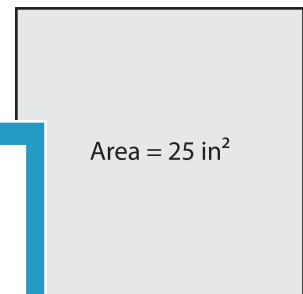


Side length =

2)

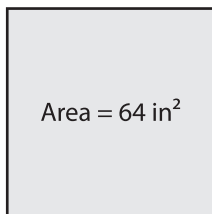


3)

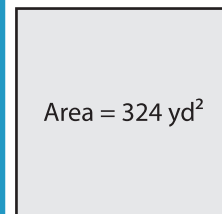


length =

4)

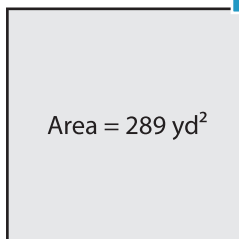


Side length =

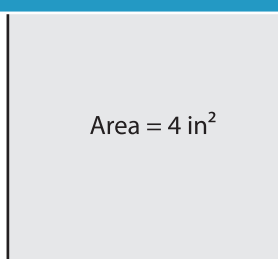


length =

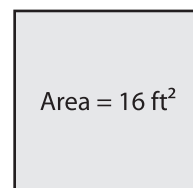
7)



Side length =



Side length =



Side length =

PREVIEW

Gain complete access to the largest collection of worksheets in all subjects!

Members, please log in to download this worksheet.

Not a member? Please sign up to gain complete access.

www.mathworksheets4kids.com