

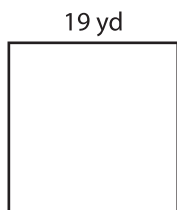
Name : _____

Perimeter of a Square

T1L2S1

Find the perimeter of each square.

1)

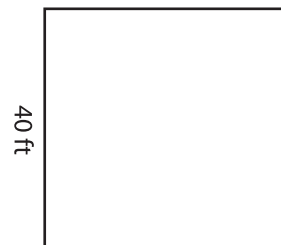


Perimeter =

2)




3)



Perimeter =

4)



Perimeter =

PREVIEW
Gain complete access to the largest collection of worksheets in all subjects!


Members, please log in to download this worksheet.

Not a member? Please sign up to gain complete access.

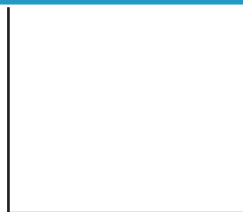
www.mathworksheets4kids.com

Perimeter =

7)



Perimeter =



Perimeter =



Perimeter =