

Name : _____

T1L2S2

Perimeter of a Square


Find the perimeter of each square.

1)



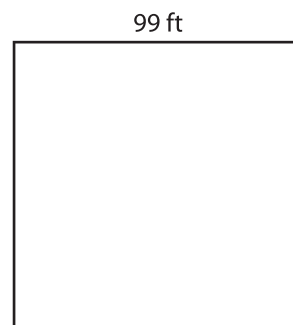
Perimeter =

2)




Perimeter =

3)



4)




Perimeter =

PREVIEW
Gain complete access to the largest collection of worksheets in all subjects!

Members, please log in to download this worksheet.


Not a member? Please sign up to gain complete access.

www.mathworksheets4kids.com



Perimeter =

7)



Perimeter =



Perimeter =



Perimeter =