


Name : \_\_\_\_\_

## Perimeter of a Square

T1L2S4

Find the perimeter of each square.

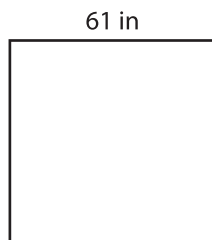
1)



13 ft

Perimeter =

2)



61 in


Perimeter =

3)



59 yd

4)



74 in

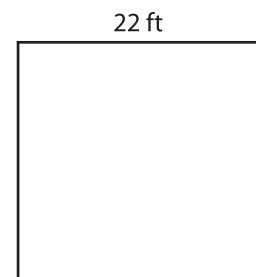
Perimeter =

**PREVIEW**  
Gain complete access to the largest collection of worksheets in all subjects!

Members, please log in to download this worksheet.

Not a member? Please sign up to gain complete access.

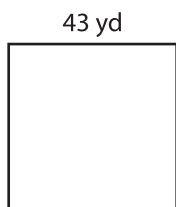
[www.mathworksheets4kids.com](http://www.mathworksheets4kids.com)



22 ft

Perimeter =

7)




43 yd

Perimeter =



81 ft

Perimeter =



37 in

Perimeter =