

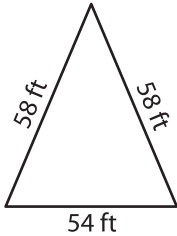
Name : _____

Perimeter of a Triangle

T1L2S3

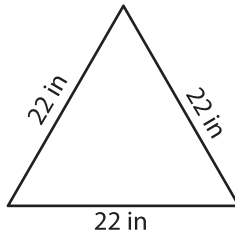
Find the perimeter of each triangle.

1)



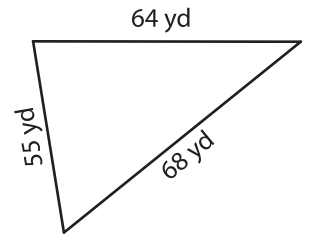
Perimeter = _____

2)

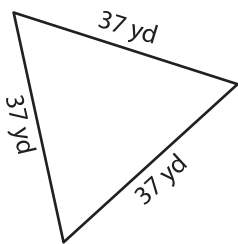


Perimeter = _____

3)



4)



Perimeter = _____

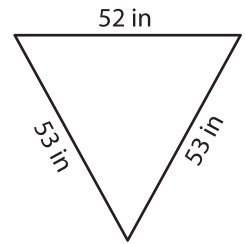
PREVIEW
Gain complete access to the largest
collection of worksheets in all subjects!

Members, please
log in to
download this
worksheet.

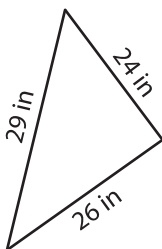
Not a member?
Please sign up to
gain complete
access.

www.mathworksheets4kids.com

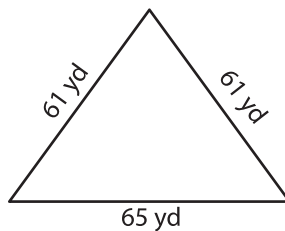
Perimeter = _____



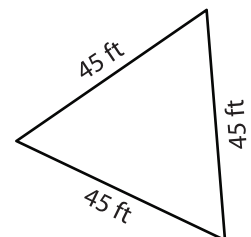
7)



Perimeter = _____



Perimeter = _____



Perimeter = _____