

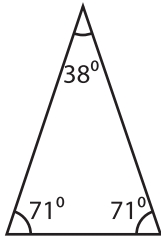
Name : _____

Identifying Triangles

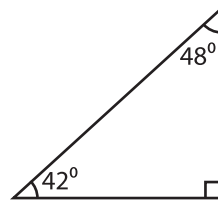
Angles - Numerals: S1

Identify each triangle based on angles. (Acute, Obtuse or Right)

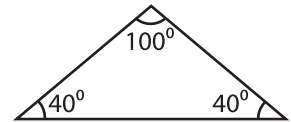
1)



2)

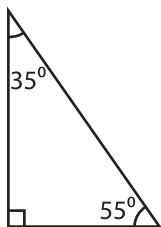


3)



Acute triangle

4)



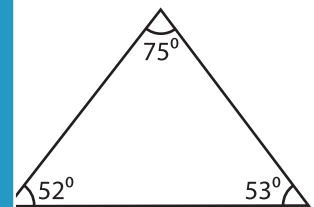
PREVIEW

Gain complete access to the largest collection of worksheets in all subjects!

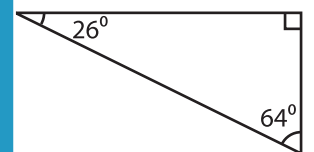
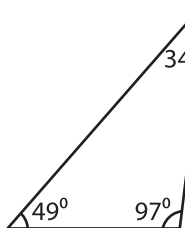
Members, please log in to download this worksheet.

Not a member? Please sign up to gain complete access.

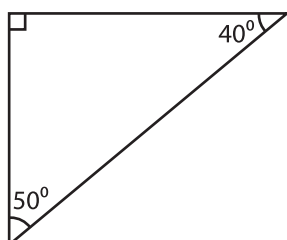
www.mathworksheets4kids.com



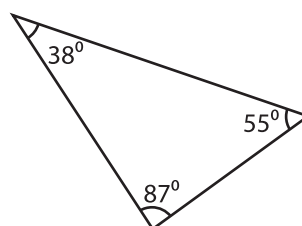
7)



10)



11)



12)

