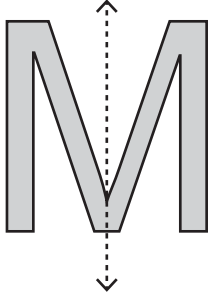


Symmetry on Letters

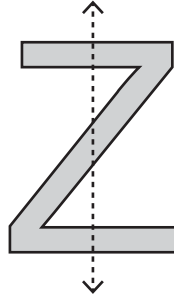
Sheet 4

Is the dotted line on each letter a line of symmetry? Write yes or no.

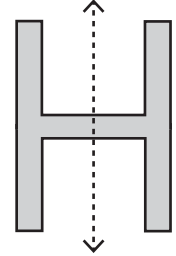
1)



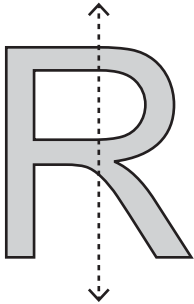
2)



3)



4)



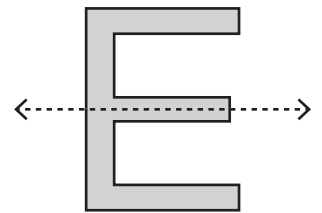
PREVIEW

Gain complete access to the largest collection of worksheets in all subjects!

Members, please log in to download this worksheet.

Not a member? Please sign up to gain complete access.


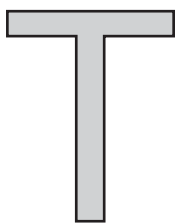
www.mathworksheets4kids.com



Draw a line of symm

ne line of symmetry)

1)



4)



5)



6)

