


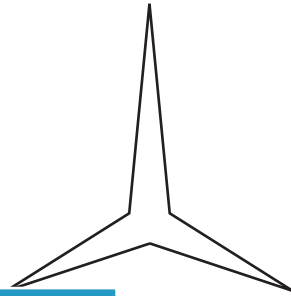
# Symmetry in Shapes

Draw a line of symmetry on each shape.

1)



2)



3)



**PREVIEW**

Gain complete access to the largest collection of worksheets in all subjects!

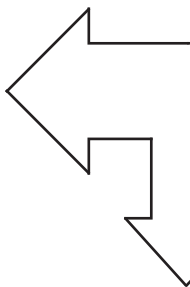
Members, please log in to download this worksheet.

Not a member? Please sign up to gain complete access.

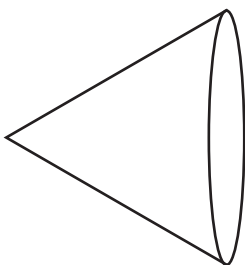
[www.mathworksheets4kids.com](http://www.mathworksheets4kids.com)



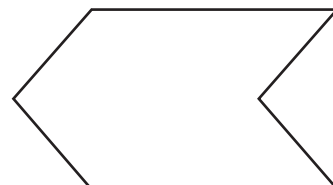
5)



7)



8)




**Answer key**

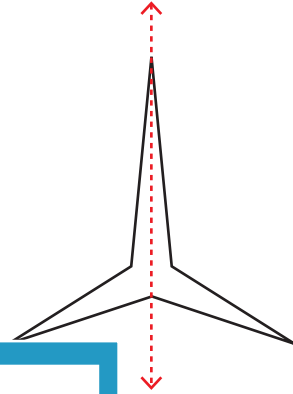
**Symmetry in Shapes**

Draw a line of symmetry on each shape.

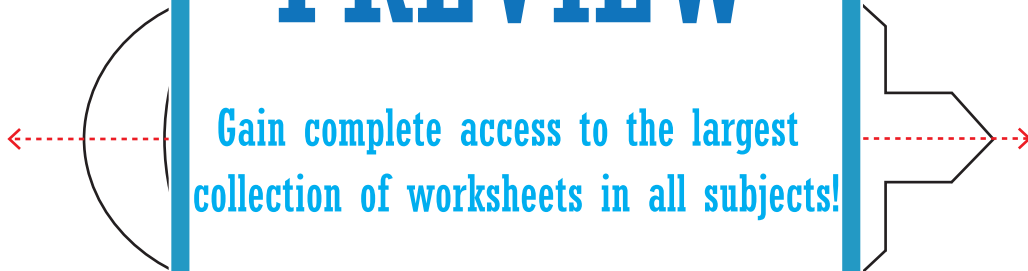
1)



2)



3)



**PREVIEW**


Gain complete access to the largest collection of worksheets in all subjects!

Members, please log in to download this worksheet.

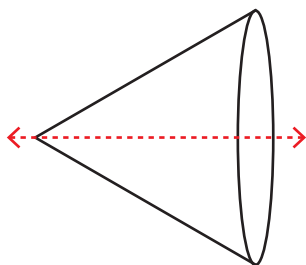
Not a member? Please sign up to gain complete access.

[www.mathworksheets4kids.com](http://www.mathworksheets4kids.com)

5)



7)



8)

