






A) Write the ordered pair for _____ located at each ordered pair.

www.mathworksheets4kids.com

- 1)  _____
- 2)  _____ 7) (1, 6) _____
- 3)  _____ 8) (4, 7) _____
- 4)  _____ 9) (8, 9) _____
- 5)  _____ 10) (9, 4) _____