

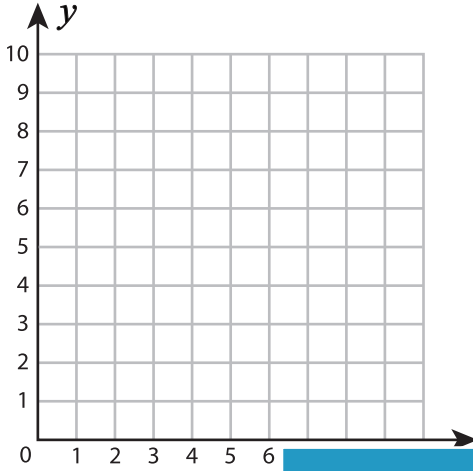
Name : _____

Plotting Points - Shapes

Positive: S3

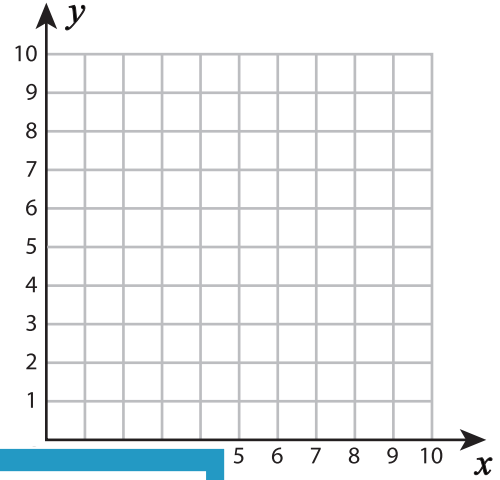
Plot and join the points in the given order. Complete the figure by joining the end points. Identify the shape.

1) $(5, 3), (5, 7), (10, 3)$




Shape: _____

2) $(3, 4), (7, 4), (8, 2), (4, 2)$

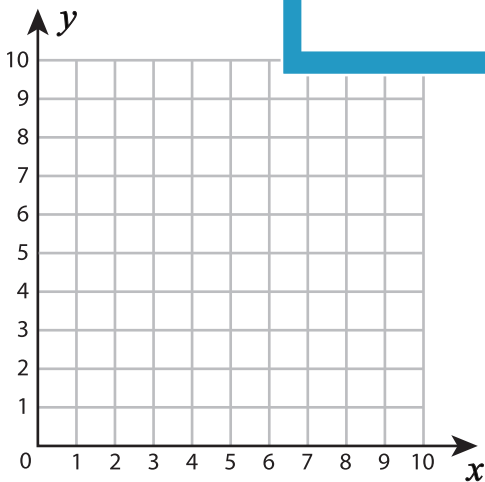


3) $(5, 9), (7, 7), (6, 4), (4, 2)$



Shape: _____

5) $(3, 5), (6, 5), (6, 2), (3, 2)$



Shape: _____

$(9, 2)$

$(3), (2, 3)$

PREVIEW

Gain complete access to the largest collection of worksheets in all subjects!

Members, please log in to download this worksheet.

Not a member? Please sign up to gain complete access.

www.mathworksheets4kids.com