


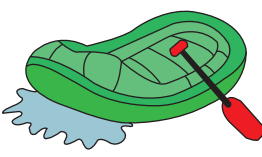
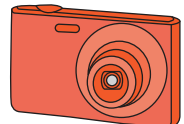
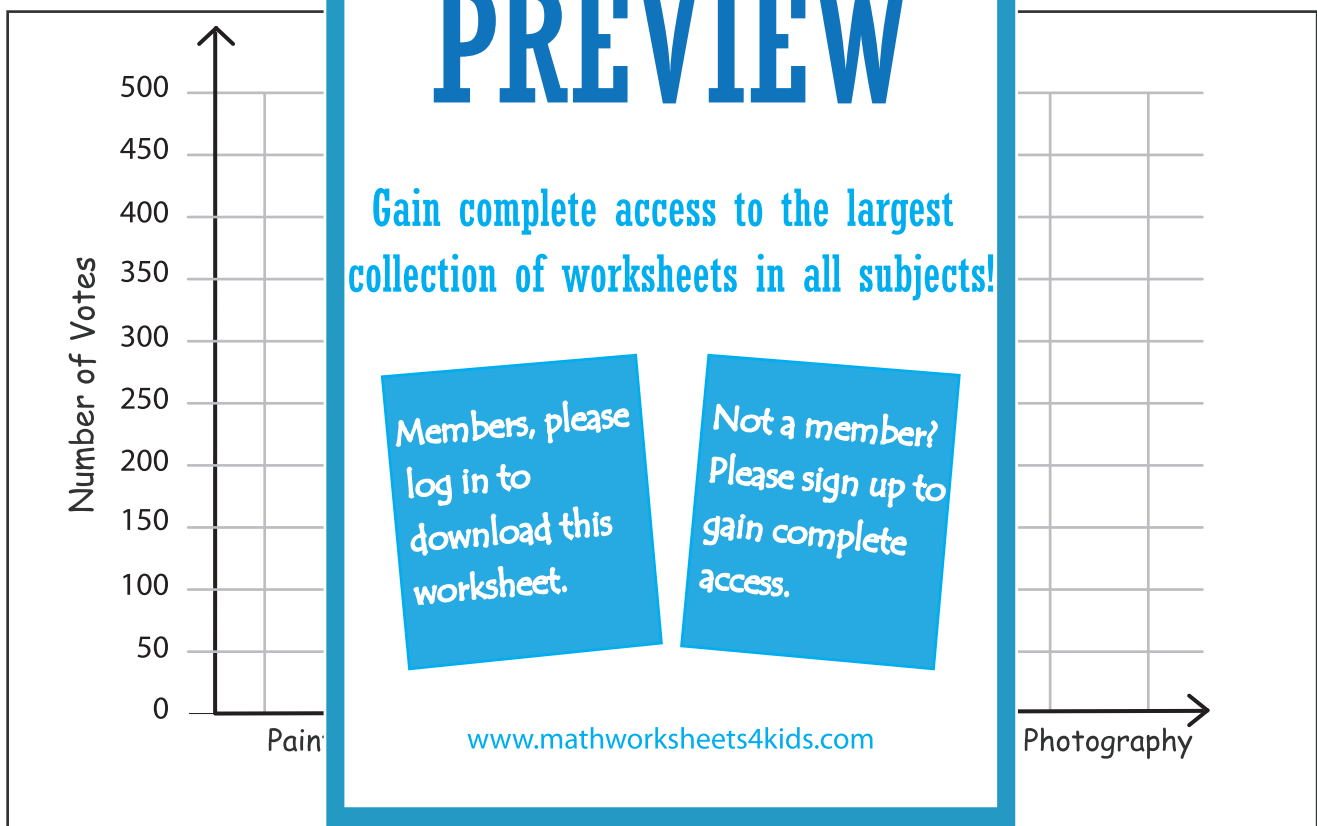


Name : \_\_\_\_\_

## Bar Graph - Summer Camp

1475 children took part in Hill Valley Summer Camp. At the end of the camp, the organizer conducted a survey among the participants on their favorite camp activity and recorded the data. Draw a bar graph to represent the data. Answer the questions.

<b>Painting</b> 	<b>Fishing</b> 	<b>Swimming</b> 	<b>White Water Rafting</b> 	<b>Photography</b> 
<b>400</b>	<b>175</b>	<b>550</b>	<b>250</b>	<b>125</b>



- 1) Which activity was the second most popular? \_\_\_\_\_
- 2) Which activity had received twice as many votes as fishing? \_\_\_\_\_
- 3) How many participants had chosen either swimming or photography? \_\_\_\_\_
- 4) If painting received 25 more votes, would it surpass swimming? \_\_\_\_\_