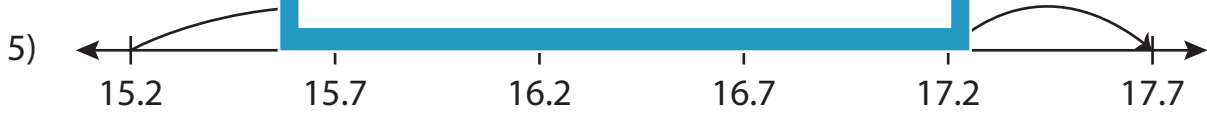
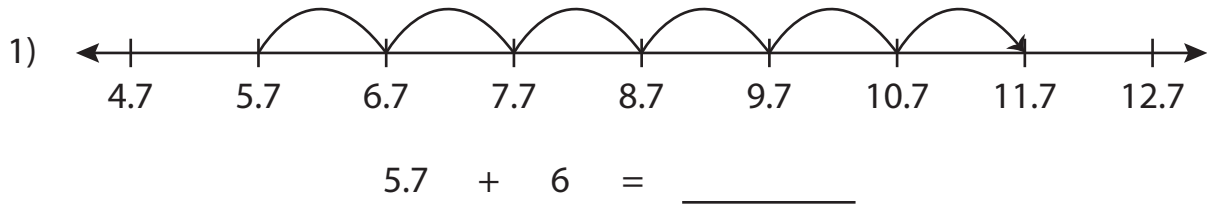


Name : _____

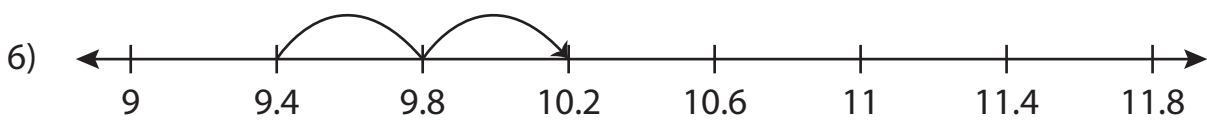
Number Line Addition

Tenth: S4

Read each number line and solve the problem.



$15.2 + 2.5 = \underline{\hspace{2cm}}$



$9.4 + 0.8 = \underline{\hspace{2cm}}$

PREVIEW

Gain complete access to the largest collection of worksheets in all subjects!

Members, please log in to download this worksheet.

Not a member? Please sign up to gain complete access.

www.mathworksheets4kids.com

Name : _____

Answer key

Number Line Addition

Tenth: S4

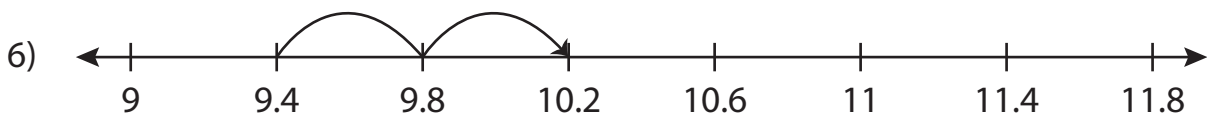
Read each number line and solve the problem.



$$5.7 + 6 = \underline{11.7}$$



$$15.2 + 2.5 = \underline{17.7}$$



$$9.4 + 0.8 = \underline{10.2}$$

PREVIEW

Gain complete access to the largest collection of worksheets in all subjects!

Members, please log in to download this worksheet.

Not a member? Please sign up to gain complete access.

www.mathworksheets4kids.com