


Name : _____

Number Line Multiplication

Tenth: S1

Indicate hops on each number line and complete the multiplication sentences.

1) $1.3 \times 4 = \underline{\hspace{2cm}}$



2) $9.5 \times 2 = \underline{\hspace{2cm}}$



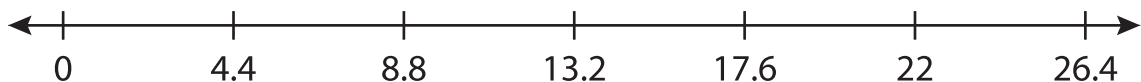
3) $0.2 \times 9 = \underline{\hspace{2cm}}$



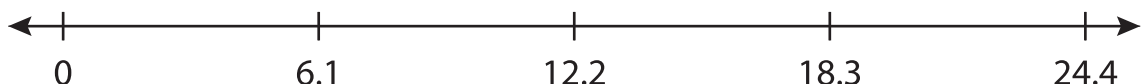
4) $2.8 \times 5 = \underline{\hspace{2cm}}$



5) $4.4 \times 6 = \underline{\hspace{2cm}}$



6) $6.1 \times 3 = \underline{\hspace{2cm}}$



PREVIEW

Gain complete access to the largest collection of worksheets in all subjects!

Members, please log in to download this worksheet.

Not a member? Please sign up to gain complete access.

www.mathworksheets4kids.com