

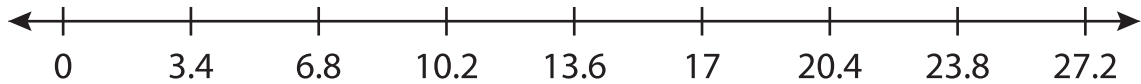
Name : _____

Number Line Multiplication

Tenth: S2

Indicate hops on each number line and complete the multiplication sentences.

1) $3.4 \times 6 = \underline{\hspace{2cm}}$



2) $2.7 \times 4 = \underline{\hspace{2cm}}$




3) $7.2 \times 3 = \underline{\hspace{2cm}}$




4) $8.9 \times 2 = \underline{\hspace{2cm}}$



5) $1.1 \times 7 = \underline{\hspace{2cm}}$



6) $0.6 \times 5 = \underline{\hspace{2cm}}$



PREVIEW

Gain complete access to the largest collection of worksheets in all subjects!

Members, please log in to download this worksheet.

Not a member? Please sign up to gain complete access.

www.mathworksheets4kids.com