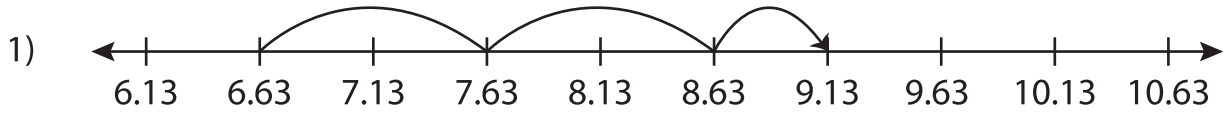


Name : _____

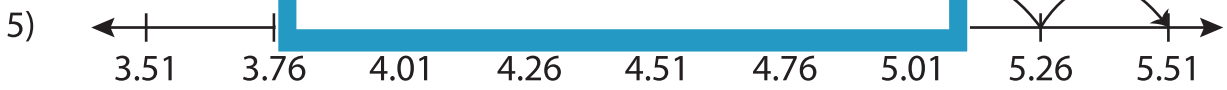
Addition Sentence

Hundredth: S1

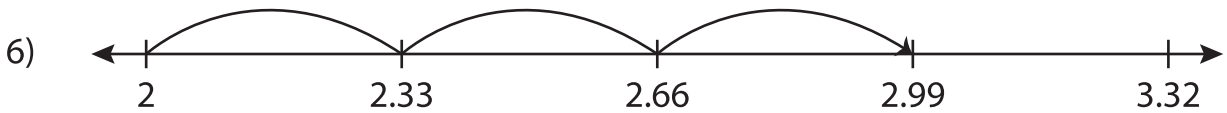
Write the addition sentence that describes each model.



_____ + _____ = _____



_____ + _____ = _____



_____ + _____ = _____

PREVIEW

Gain complete access to the largest collection of worksheets in all subjects!

Members, please log in to download this worksheet.

Not a member? Please sign up to gain complete access.

www.mathworksheets4kids.com