

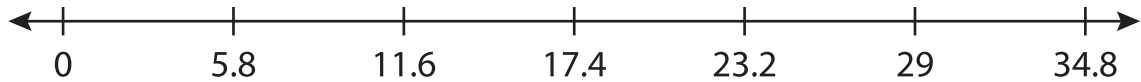
Name : \_\_\_\_\_

# Number Line Division

Sheet 1

Indicate hops on each number line and complete the division sentences.

1)  $29 \div 5.8 =$  \_\_\_\_\_



2)  $12 \div 1.5 =$  \_\_\_\_\_



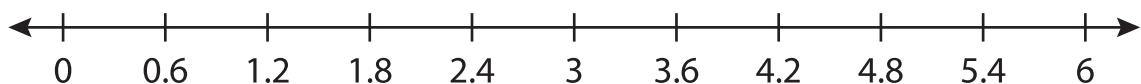
3)  $17 \div 3.4 =$  \_\_\_\_\_



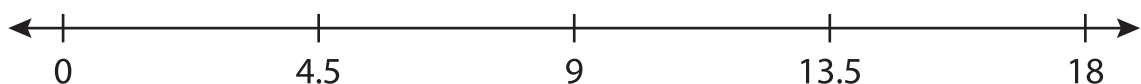
4)  $10 \div 2.5 =$  \_\_\_\_\_



5)  $6 \div 0.6 =$  \_\_\_\_\_



6)  $9 \div 4.5 =$  \_\_\_\_\_



**PREVIEW**

Gain complete access to the largest collection of worksheets in all subjects!

Members, please log in to download this worksheet.

Not a member? Please sign up to gain complete access.

[www.mathworksheets4kids.com](http://www.mathworksheets4kids.com)