

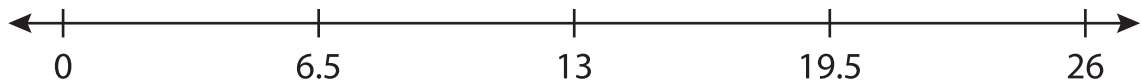
Name : _____

Number Line Division

Sheet 2

Indicate hops on each number line and complete the division sentences.

1) $13 \div 6.5 =$ _____



2) $9 \div 0.9 =$ _____



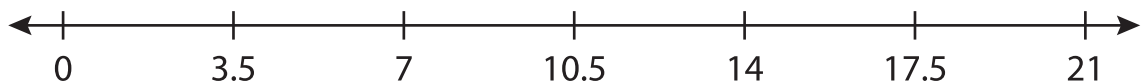
3) $45 \div 7.5 =$ _____



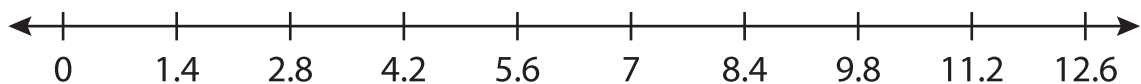
4) $26 \div 5.2 =$ _____



5) $14 \div 3.5 =$ _____



6) $7 \div 1.4 =$ _____



PREVIEW

Gain complete access to the largest collection of worksheets in all subjects!

Members, please log in to download this worksheet.

Not a member? Please sign up to gain complete access.

www.mathworksheets4kids.com