

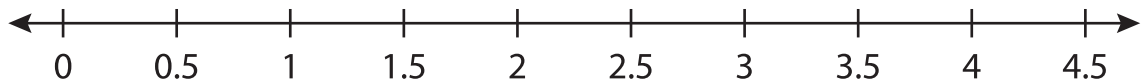
Name : _____

Number Line Division

Sheet 3

Indicate hops on each number line and complete the division sentences.

1) $4 \div 0.5 = \underline{\hspace{2cm}}$



2) $16 \div 3.2 = \underline{\hspace{2cm}}$




3) $18 \div 4.5 = \underline{\hspace{2cm}}$



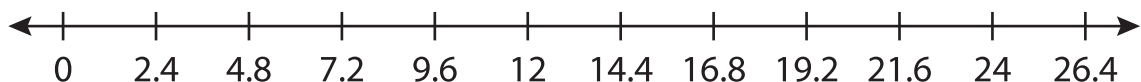
4) $13 \div 1.3 = \underline{\hspace{2cm}}$



5) $11 \div 5.5 = \underline{\hspace{2cm}}$



6) $24 \div 2.4 = \underline{\hspace{2cm}}$



PREVIEW

Gain complete access to the largest collection of worksheets in all subjects!

Members, please log in to download this worksheet.

Not a member? Please sign up to gain complete access.

www.mathworksheets4kids.com