

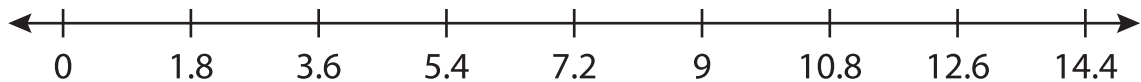
Name : _____

Number Line Division

Sheet 5

Indicate hops on each number line and complete the division sentences.

1) $9 \div 1.8 =$ _____



2) $26 \div 2.6 =$ _____



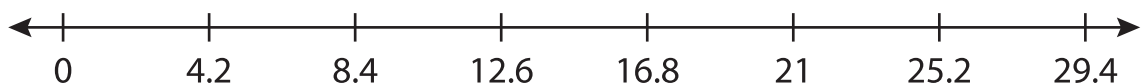
3) $3 \div 0.5 =$ _____



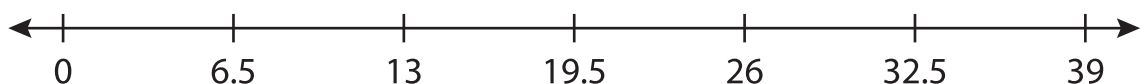
4) $28 \div 3.5 =$ _____



5) $21 \div 4.2 =$ _____



6) $39 \div 6.5 =$ _____



PREVIEW

Gain complete access to the largest collection of worksheets in all subjects!

Members, please log in to download this worksheet.

Not a member? Please sign up to gain complete access.

www.mathworksheets4kids.com