

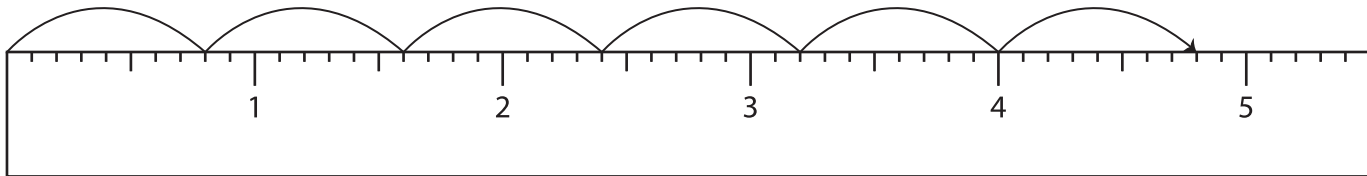
Name : _____

Multiplication Sentence - Ruler

Sheet 3

Read each ruler and write the multiplication sentences.

1)



$$\underline{\quad} \times \underline{\quad} = \underline{\quad}$$


2)



3)

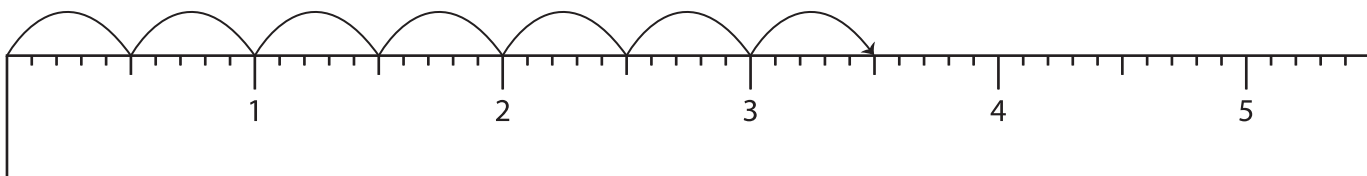


4)



$$\underline{\quad} \times \underline{\quad} = \underline{\quad}$$

5)



$$\underline{\quad} \times \underline{\quad} = \underline{\quad}$$

PREVIEW

Gain complete access to the largest collection of worksheets in all subjects!

Members, please log in to download this worksheet.

Not a member? Please sign up to gain complete access.

www.mathworksheets4kids.com