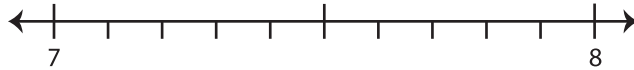


Rounding Mixed Number: Number Line

Round each mixed number to the nearest half using number line.

1) $7\frac{4}{10}$

- i) Label $7\frac{4}{10}$ on the number line.

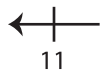


- ii) Which is closer to $7\frac{4}{10}$? a) 7 b) $7\frac{1}{2}$ c) 8

iii) $7\frac{4}{10}$ rounded to the nearest half is _____

2) $11\frac{6}{7}$

- i) Label 11 on the number line.

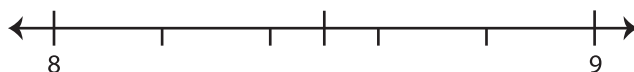


- ii) Which is closer to $11\frac{6}{7}$? a) 11 b) $11\frac{1}{2}$ c) 12

iii) $11\frac{6}{7}$ rounded to the nearest half is _____

3) $8\frac{3}{5}$

- i) Label $8\frac{3}{5}$ on the number line.



- ii) Which is closer to $8\frac{3}{5}$? a) 8 b) 9 c) $8\frac{1}{2}$

iii) $8\frac{3}{5}$ rounded to the nearest half is _____

PREVIEW

Gain complete access to the largest
collection of worksheets in all subjects!

Members, please
log in to
download this
worksheet.

Not a member?
Please sign up to
gain complete
access.

www.mathworksheets4kids.com